

Geometry

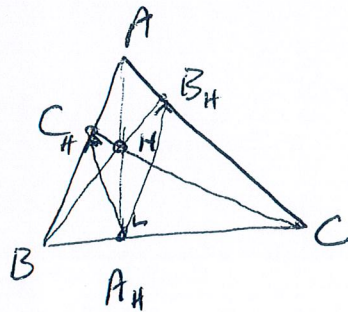
9th March 2019

May Hanley

Some notation which we'll use

- In a $\triangle ABC$,
- we denote the medians by $[AA']$, $[BB']$ and $[CC']$,
 - ... altitudes " $[AA_H]$, $[BB_H]$ " $[CC_H]$,
 - " ... circumcentre by G
 - " orthocentre by H
 - " circumcentre by O
 - " incentre by I .

Problem: Using the points marked in the diagram, how many cyclic quadrilaterals can you list. Say why in each case. Name the diameter of the circumcircle of the c.q. if possible.



Answer: (a) $C_H B_H BC$ is a c.q. since $\angle BC_H C = 90^\circ = \angle BB_H C$.

Similarly $B_H A_H BA$ and $A_H C_H AC$ are c.q.s.

The circumcircles of these three have diameters $[BC]$, $[BA]$, $[AC]$ respectively, since the angle in a semicircle is 90°

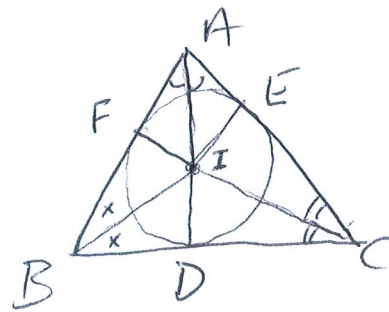
(b) $C_H H A_H B$ is a cyclic quadrilateral since $\angle HA_H B = 90^\circ = \angle BC_H H$, with circumcircle diameter $[BH]$.

Similarly, $B_H H A_H C$ is,

and $B_H H C_H A$,

" " " $[HC]$
 " " " $[AH]$

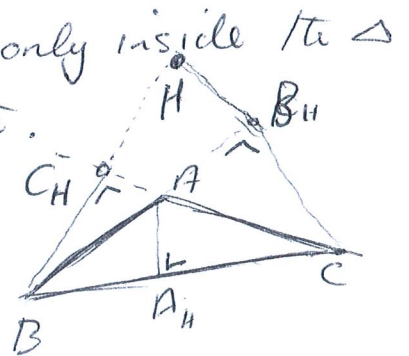
The incircle of a triangle is the circle that has each of the three sides of the Δ as tangents.



The incentre of ΔABC is the point where the bisectors of its angles intersect.

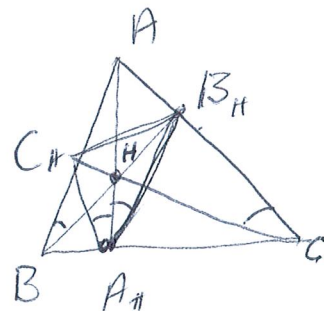
Proof: Every point on the bisector of $\angle ABC$ is equidistant from the arms of the angle i.e. from BA and BC. So $|IF| = |ID|$. Similarly, $|IE| = |ID|$ since IC bisects $\angle ACB$. So the circle with radius $|IE| = |ID| = |IF|$ touches each of the three sides of ΔABC .

Note that the orthocentre of a Δ is only inside the Δ when all angles of the Δ are acute.



We show that the orthocentre of the acute-angled ΔABC is the incentre of its orthic $\Delta A_H B_H C_H$.

Proof: Let 1 denote $\angle C_H B_H A_H$
 " 2 " $\angle C_H A_H B_H$
 " 3 " $\angle B_H A_H C_H$
 " 4 " $\angle B_H C_H A_H$
 $1 = 2$ since $C_H H A_H B_H$ is cyclic (Problem page 1)
 $3 = 4$ " $H B_H C_H A_H$ " " " (b)
 $1 = 3$ " $C_H B_H C_B$ " " (a).



$\Rightarrow 2 = 3 \Rightarrow A_H H$ bisects $\angle C_H A_H B_H$.

Similarly $B_H H$ " $\angle C_H B_H A_H$

and $C_H H$ " $\angle A_H C_H B_H$.

Thus, H is the incentre of $\Delta A_H B_H C_H$

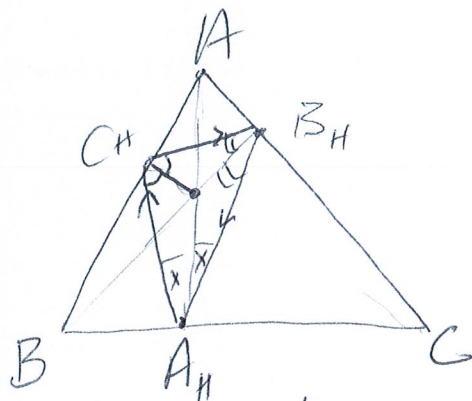
Some observations about $\Delta A_H B_H C_H$, the orthic Δ of the acute-angled ΔABC .

1) For a ray of light hitting a plane (flat) mirror, the angle of incidence equals the angle of reflection.



Now, imagine a billiard table whose sides form the ΔABC .

A billiard ball travelling towards the ^{point} C_H in the direction $A_H C_H$ will bounce off side AB in the direction $C_H B_H$, hit the point B_H , bounce and hit A_H , then C_H again and thus follow a closed billiard path.



2) Can you find another three points on the sides of the ΔABC that form a closed billiard path? Nobody knows whether or not another such closed path exists for general acute-angled triangles. It is an open question.

3) Maryam Mirzakhani (1977-2017) who got a Fields Medal in 2014 (the only woman to ^{ever} get one) (and also got a gold medal at the IMO in 1994 and 1995 when she was on the Iranian team) did work in this area.

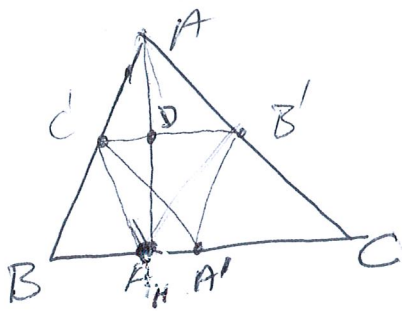
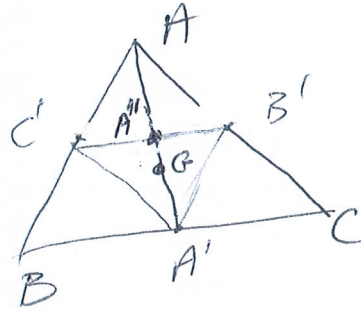
4) $\Delta A_H B_H C_H$ is also known as the Fagnano Δ of ΔABC . It is the Δ , whose vertices are on the sides of ΔABC , with the shortest perimeter. (Fagnano, '7)

The $\Delta A'B'C'$ is called the medial Δ of ΔABC .

Exercises: 1) Show that ΔABC and $\Delta A'B'C'$ have the same centroid.

2) Show that $|AG| = 2|GA'|$.

1) Hint: show $AB'A'C'$ is a parallelogram. Then A'' , the point where the diagonals meet is the mid point of $[C'B']$.



We will show that A_H, B_H and C_H are on the circumcircle of the medial $\Delta A'B'C'$.

Proof: If A_H is on the circumcircle of $\Delta A'B'C'$ then $C'B'A'A_H$ is a cyclic quadrilateral so this is what we'll show.

First, $AB'A'C'$ is a parallelogram so

$$\boxed{\angle C'AB' = \angle C'A'B' \quad *}$$

$C'B' \parallel BC$ and C' and B' are the midpts of $[AB]$ and $[AC]$ resp, so $\Delta ADC' \cong \Delta A_H DC$ are congruent,

$$\begin{aligned} |AD| &= |DA_H| \\ \angle ADC' &= \angle A_H DC \\ |CD| &= |C'D| \end{aligned}$$

$$\text{and so } \boxed{\angle C'AD = \angle C'A_H D \quad (1)}$$

Similarly, $\Delta AB'D \cong \Delta A_H B'D$ are congruent

$$\text{so } \boxed{\angle B'AD = \angle B'A_H D \quad (2)}$$

Add (1) and (2) , we see that $\boxed{\angle BAC' = \angle C'A_H B' \quad **}$

From $*$ and $**$, $\angle C'A_H B' = \angle C'A'B'$

Thus, $C'B'A'A_H$ is a cyclic quadrilateral.

Similarly, it follows that B_H and C_H are also on the circumcircle of $\Delta A'B'C'$. (4)